

Name: _____

Date: _____

VALENTINE'S DAY PUZZLE:

ADDITION AND SUBTRACTION WITHIN 10

Find the value of each picture. Each picture has the same value across equations.


1. 7 -  = 4


2.  + 1 = 

3.  +  = 


4.  -  = 

Write the value of each picture.

 = _____

 = _____

 = _____

 = _____