





Name: _____



Date: _____

VALENTINE'S DAY WORKSHEET

Count the objects and write the numbers. Then solve the equations.

				<div data-bbox="1114 533 1388 728" style="border: 1px solid black; width: 172px; height: 87px;"></div>
_____	+	_____	=	

				<div data-bbox="1114 801 1388 996" style="border: 1px solid black; width: 172px; height: 87px;"></div>
_____	+	_____	=	

				<div data-bbox="1114 1070 1388 1265" style="border: 1px solid black; width: 172px; height: 87px;"></div>
_____	+	_____	=	

				<div data-bbox="1114 1339 1388 1534" style="border: 1px solid black; width: 172px; height: 87px;"></div>
_____	+	_____	=	