











Thanksgiving Math Operation

Directions : Complete the following mathematical operations with the images that show the following numbers.

 = 5	 = 2	 = 1
 = 3	 = 4	 = 6

1.  +  -  =

2.  ×  +  =

3.  -  -  =

4.  ×  ÷  =

5.  +  ÷  =