



Addition and Subtraction





Directions : Count the number below and write down your answer in the box.






$$\begin{array}{r} 43 \\ + 54 \\ \hline \end{array}$$



$$\begin{array}{r} 73 \\ - 19 \\ \hline \end{array}$$



$$\begin{array}{r} 14 \\ + 48 \\ \hline \end{array}$$



$$\begin{array}{r} 12 \\ + 14 \\ \hline \end{array}$$


$$\begin{array}{r} 17 \\ + 21 \\ \hline \end{array}$$


$$\begin{array}{r} 20 \\ - 11 \\ \hline \end{array}$$


$$\begin{array}{r} 14 \\ + 17 \\ \hline \end{array}$$


$$\begin{array}{r} 19 \\ - 11 \\ \hline \end{array}$$


$$\begin{array}{r} 30 \\ - 17 \\ \hline \end{array}$$