









# Thanksgiving Math

Directions : Calculate the number operations below with numbers based on the available image code.

 = 5	 = 2	 = 1
 = 3	 = 4	 = 6

1.  +  =

7.  ÷  =

2.  +  =

8.  ×  =

3.  -  =

9.  ÷  =

4.  +  =

10.  ×  =

5.  +  =

11.  +  =

6.  -  =

12.  ÷  =