

Name : _____

Score : _____

Teacher : _____

Date : _____

What is the Fraction of the Shaded Area ?






















Shade the Figure with the Indicated Fraction.



 $\frac{1}{4}$



 $\frac{2}{6}$



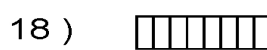
 $\frac{6}{8}$



 $\frac{2}{5}$



 $\frac{1}{6}$




 $\frac{4}{8}$



 $\frac{3}{4}$



 $\frac{3}{8}$



 $\frac{2}{4}$



 $\frac{1}{5}$