


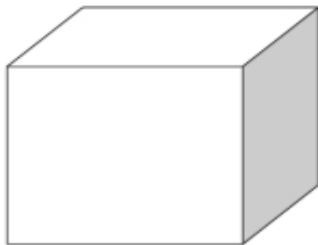
Enter the number of Faces, Edges and Vertex for each 3D Shape



Faces: _____

Edges: _____


Vertex: _____



Faces: _____

Edges: _____

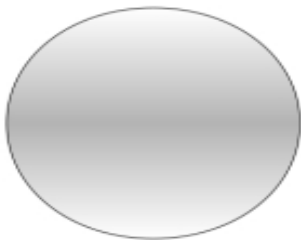
Vertex: _____



Faces: _____

Edges: _____

Vertex: _____



Faces: _____

Edges: _____

Vertex: _____